











Q.1. Read the description of the activities and find the finish time for each activity.





The clock shows start time of each activity:

<p style="text-align: center;">1.</p> <p>It is...</p>  <p>It took me 15 minutes to clean my room. Now what time is it?</p>	<p style="text-align: center;">2.</p> <p>It is...</p>  <p>We went to the park for 30 minutes. Now what time is it?</p>
<p style="text-align: center;">3.</p> <p>It is...</p>  <p>It took me 20 minutes to do my homework. Now what time is it?</p>	<p style="text-align: center;">4.</p> <p>It is...</p>  <p>It took me 10 minutes to wash the dishes. Now what time is it?</p>





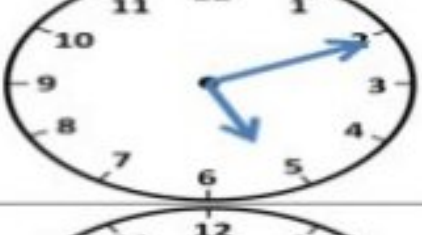


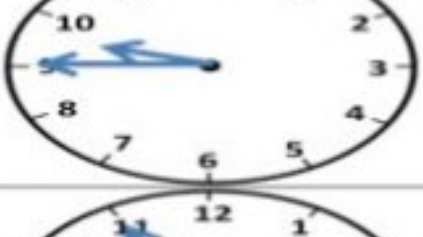
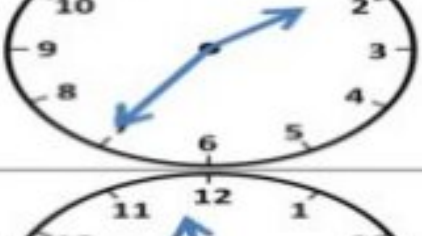
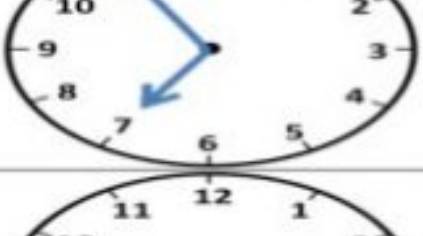


Q.2. Complete the Chart:

Analogue	Digital	Words
		<p style="text-align: center;">Six fifteen or Quarter past six</p>
		
		
		
		

Q.3. Solve the following time word problems:

Solve the following time word problems.	
<p>1) Jimmy's maths class begins at the time shown on the clock. It's a 2 hour long class. At what time does the class end?</p>	
<p>2) Sara works for 1 hour in the garden every day. If she begins working at 5:30pm, when does she get done with her work?</p>	
<p>3) Tina's cooking class begins at the time shown on the clock. It's a three hour long class. When does it end?</p>	
<p>4) Finn goes for swimming at the time shown on the clock. He swims for 2 hours every day. At what time does he stop swimming?</p>	

Q.4. Write down the correct time in digital:

	5 minutes later	9:05		10 minutes earlier	
	10 minutes earlier			15 minutes later	
	20 minutes later			1 hour earlier	
	1 hour later			30 minutes later	
	15 minutes earlier			25 minutes earlier	
	20 minutes earlier			30 minutes earlier	

Q.5. Solve the following time word problems:

1) My office time starts at 9:00 am and ends at 5:00pm. How long do I work at my office?

2) My English class begins at sharp 10:30 am. It a 2 hour 30 minute long class. When does it end?

3) I went to the cricket stadium to watch the cricket match. It started at 2:00pm and lasted 3 hours. When did the game end?

4) Michael went to the park with his friends at 4:10pm and came back home at 5:30pm. How long did they all play in the park?

5) Joe goes for a walk with his father every day for 1 hour before going to school. They get back home at 6:30 am. When do they leave home for walk?

6) George spent 15 minutes playing a game on his ipad and then another 30 minutes playing a game on his father's laptop. How many minutes did he spend playing games in all?

Q.6. Matchstick Puzzle:

Can you move 4 matchsticks to create 7 squares instead of 5?

