












Q 1. Find out how many packets of tens, hundreds and loose items each animal will take.  
Fill in the blanks.

		Packets of 100	Packets of 10	Loose items
	 143			
	 210	_____	_____	_____
	 242	_____	_____	_____
	 552	_____	_____	_____

Q.2. Write the answers as quickly as you can :

- How many eights are the same as 32 \_\_\_\_\_
- How many sevens are the same as 49 \_\_\_\_\_
- How many day are there in eight weeks ? \_\_\_\_\_
- A bag has seven sweets. Anita buys five bags. How many sweets does she have now? \_\_\_\_\_
- Find the pattern for each row and fill in the missing numbers:

i) 

3	6	5
---	---	---

6	12	11
---	----	----

 2    \_\_\_    \_\_\_

ii) 

4	6	9
---	---	---

8	10	13
---	----	----

 15    \_\_\_    \_\_\_

Q.3 Fill in the blanks :

- 10 less than 34 is \_\_\_\_\_.
- $53 - 20 =$  \_\_\_\_\_
- 11 more than 31 is \_\_\_\_\_.
- 11 less than 66 is \_\_\_\_\_.
- $62 + 13 =$  \_\_\_\_\_
- 23 less than 89 is \_\_\_\_\_.
- 10 and 40 more is \_\_\_\_\_.
- 9 added to 28 gives \_\_\_\_\_.
- The sum of 9 and 44 is \_\_\_\_\_.
- Reducing 98 by 34 gives \_\_\_\_\_.
- 4 and 37 more is \_\_\_\_\_.
- Take 35 away from 83. We get \_\_\_\_\_.

**Q.4 Change the places of the number cards given in such a way to get the correct answers. (Use the properties of addition and subtraction)**

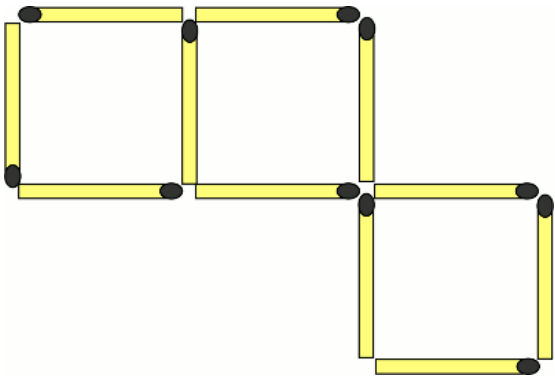
a)

50		70		20		50		20		70
	+		=				-		=	
	+		=				-		=	

b)

30		42		12		30		42		12
	+		=				-		=	
	+		=				-		=	

**Q.5 Match stick puzzle : Move 3 matches to show 2 squares.**



**Q.6 Fill in the following table with appropriate examples / actions. One row is filled for you.**

Takes minutes	Takes hours	Takes days	Takes months
i) A bath	To set curds	To knit a sweater	To grow wheat
ii)			
iii)			
iv)			
v)			