



Pawar Public School, Nanded City




Std: III Worksheet no. 6 Subject: Mathematics Date: 8th May 2020

Q1) Given below are some festivals we celebrate during the year. Look at the calendar 2020 to find the days on which these falls.

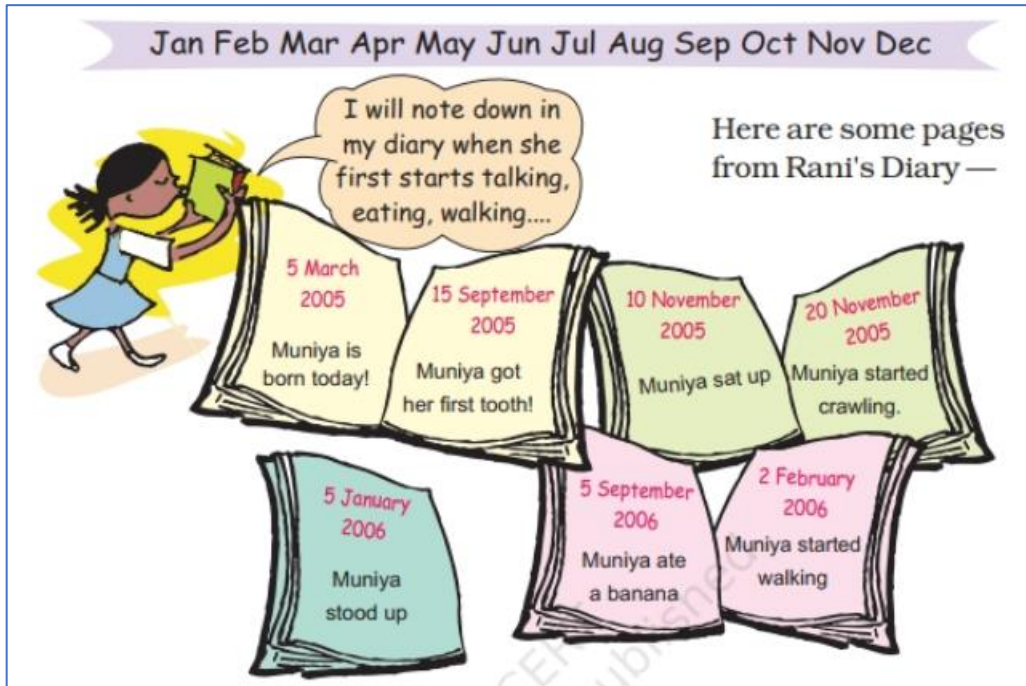
Name of the Festival	Date	Day
Diwali	November 14	
Pongal	January 15	
Raksha Bandhan	August 3	
Gandhi Jayanti	October 2	
Milad-UI-Nabi	October 30	
Onam	August 31	
Guru Nanak's Birthday	November 30	
Guru Ravindra's Birthday	February 9	
Christmas Day	December 25	
Bihu	April 14	

- a) Arrange the festivals in the order in which they come in the year
- b) Which festival comes in beginning the of the year?
- c) Which festival comes at the end the of the year?

Q2) Three friends read time from a clock. Who is right?

	Cheeku	Bittu	Pinki
	12:03	2:15	3:00
	3:40	7:30	5:35
	7:03	3:35	7:15

Q3) Here are some pages from Rani's Diary



- Muniya got her first tooth in September. How many months old was she then? How many months have passed from March to September?
- How many months was Muniya, when she first sat up?
- What did she do first – 1) walking / eating a banana
2) crawling / standing

Q4) Puzzle time...

a)

CHALLENGE 1

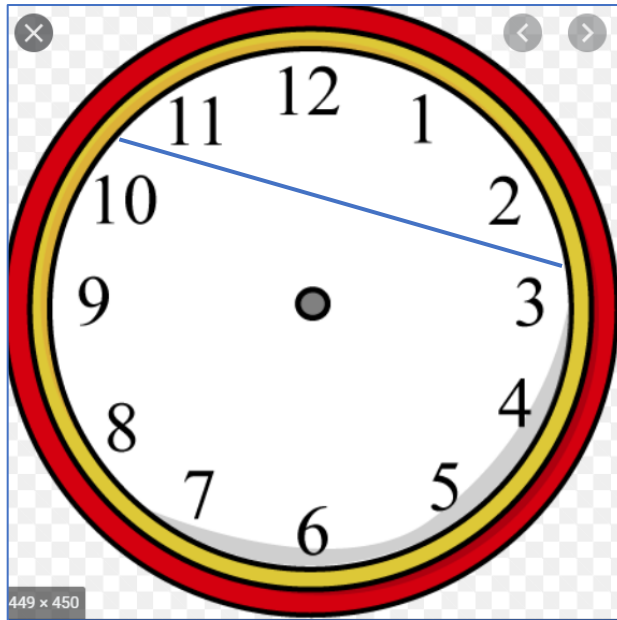
- I am between 8 o'clock in the morning and 3:00 in the afternoon.
- My number of minutes is odd.
- I am more than half an hour away from the next o'clock.
- I am closer to 5pm than to 5am.

What time am I? _____













A 8:27am	B 2:50pm	C 1:17pm	D 8:41pm
E 10:03am	F 7:35pm	G 11:39am	H 9:54pm



b) Divide the clock face into three parts so that the sum of the numbers in each part is the same.



Q5) What is time?

<p>1 a.</p>  <p>____ : ____</p>	<p>1 b.</p>  <p>____ : ____</p>	<p>1 c.</p>  <p>____ : ____</p>
<p>2 a.</p>  <p>____ : ____</p>	<p>2 b.</p>  <p>____ : ____</p>	<p>2 c.</p>  <p>____ : ____</p>
<p>3 a.</p>  <p>____ : ____</p>	<p>3 b.</p>  <p>____ : ____</p>	<p>3 c.</p>  <p>____ : ____</p>
<p>4 a.</p>  <p>____ : ____</p>	<p>4 b.</p>  <p>____ : ____</p>	<p>4 c.</p>  <p>____ : ____</p>